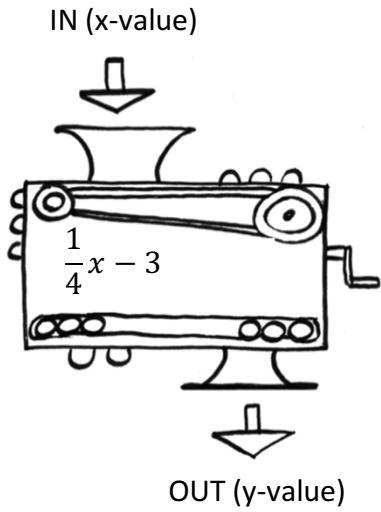


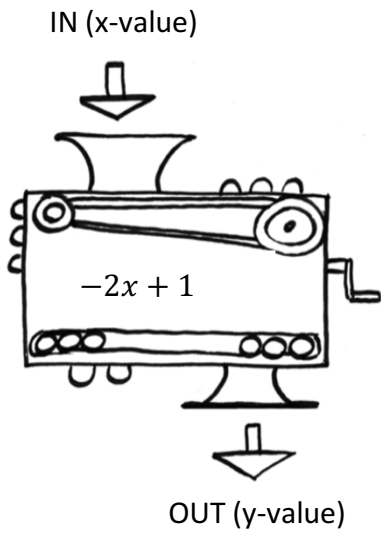
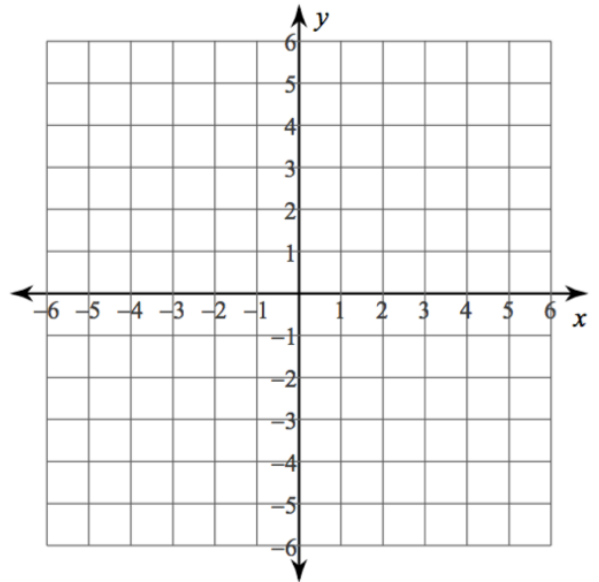
Name: _____

Skill 7 Practice



In (x-value)	Out (y-value)
-6	
-4	
0	
2	
4	
6	

You might get some fractions or decimals for these questions.



In (x-value)	Out (y-value)
-2	
-1	
0	
1	
2	
3	

You might get some fractions or decimals for these questions.

