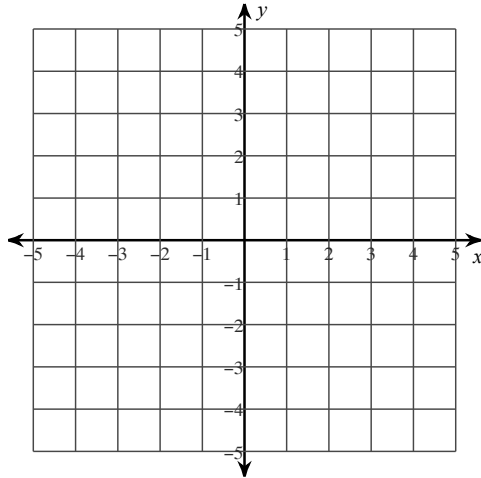


Skill 3

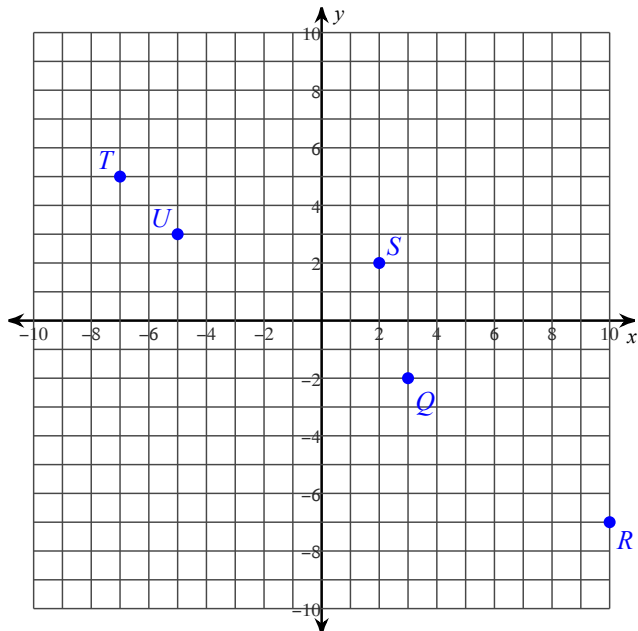
Plot each point.

- 1) $G(-2, 2)$ $F(3, 1)$ $E(-2, -2)$
 $D(5, 4)$ $C(-2, 0)$



State the coordinates of each point.

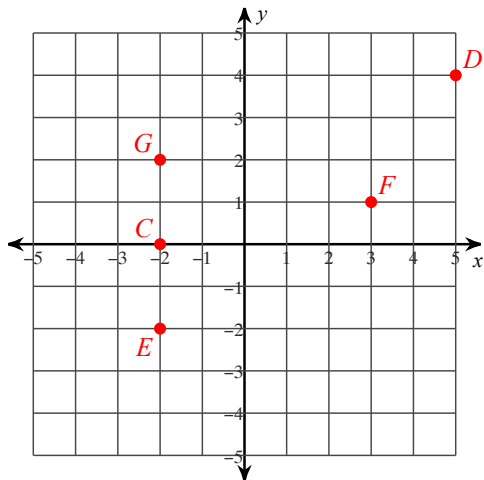
2)



Skill 3

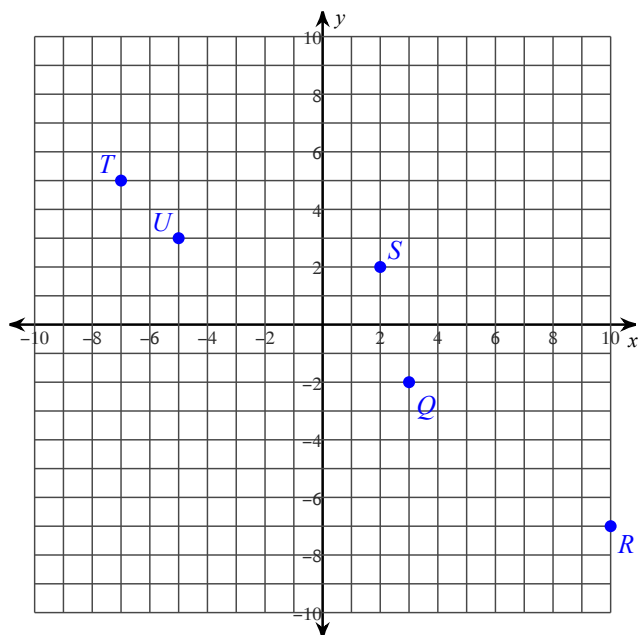
Plot each point.

- 1) $G(-2, 2)$ $F(3, 1)$ $E(-2, -2)$
 $D(5, 4)$ $C(-2, 0)$



State the coordinates of each point.

2)



- $U(-5, 3)$ $T(-7, 5)$ $S(2, 2)$
 $R(10, -7)$ $Q(3, -2)$